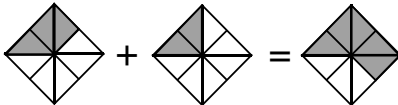
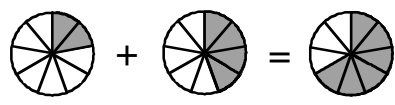
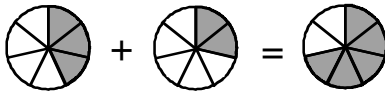


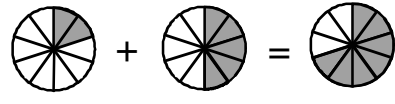
- Übung 13 -

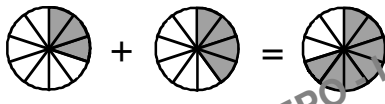
Addiere folgende Brüche. Die Zeichnungen helfen dir dabei.

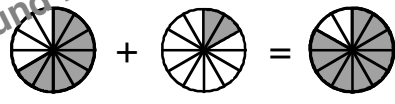

$$\frac{3}{8} + \frac{2}{8} = \boxed{\quad}$$

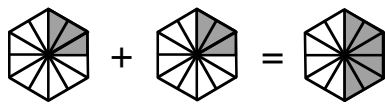

$$\frac{2}{9} + \frac{4}{9} = \boxed{\quad}$$

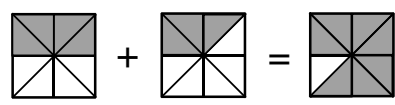

$$\frac{3}{7} + \frac{2}{7} = \boxed{\quad}$$

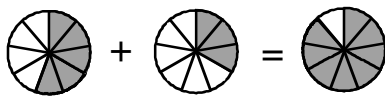

$$\frac{2}{10} + \frac{5}{10} = \boxed{\quad}$$

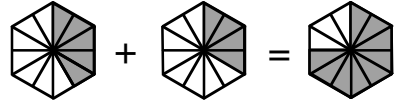

$$\frac{3}{10} + \frac{4}{10} = \boxed{\quad}$$


$$\frac{8}{12} + \frac{2}{12} = \boxed{\quad}$$


$$\frac{3}{12} + \frac{3}{12} = \boxed{\quad}$$


$$\frac{4}{8} + \frac{3}{8} = \boxed{\quad}$$


$$\frac{5}{9} + \frac{3}{9} = \boxed{\quad}$$


$$\frac{5}{12} + \frac{4}{12} = \boxed{\quad}$$